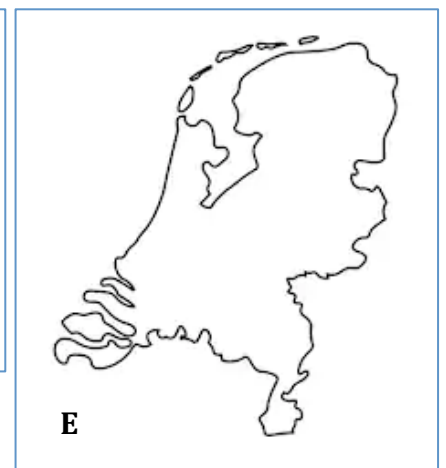
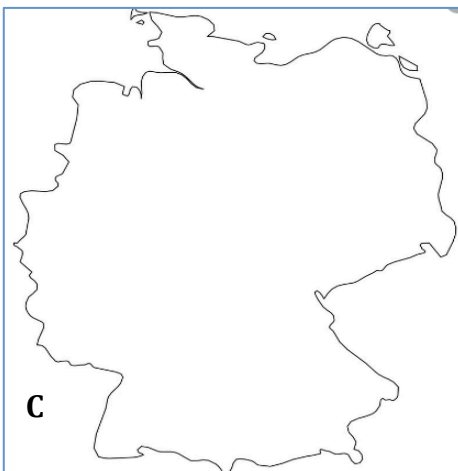
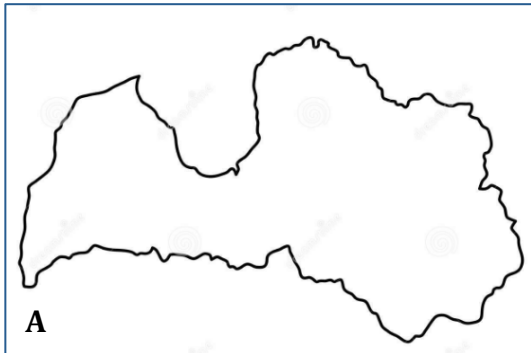


'ARRIVING' PAGE ACTIVITY SHEET

1 Here are the outlines of 5 European countries (not to scale). They all had significant Jewish populations. Look at the map of Europe on the 'Arriving' page and identify the 5 countries.



2 Look at the map of Europe. In which country would you find these towns?

1) SOUTH SHIELDS	
2) YPRES	
3) AMSTERDAM	

4) COLOGNE	
5) PREZDECZ	

3 Look at the world map. Unscramble the names of the countries. To help you, we have added the numbers from the key on the map.

1) IRZABL (21)	
2) GRITAANNE (23)	

3) QAIR (17)	
4) ASIRUS (16)	
5) UHSOT RAFACI (24)	